


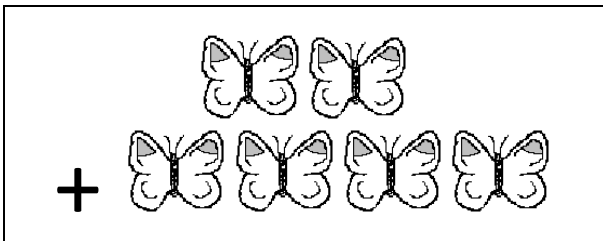
OPERACIONES DE SUMA HASTA 12 HOJA 2

Dibuja líneas para unir la imagen de la suma con la suma y la respuesta.



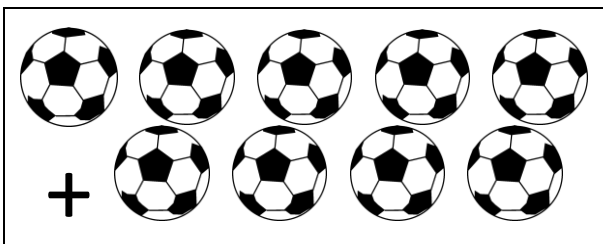
$$6 + 5$$

$$=6$$



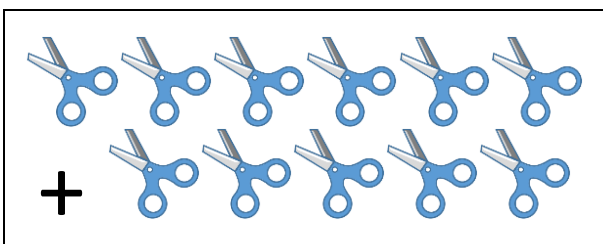
$$4 + 3$$

$$=7$$




$$6 + 6$$

$$=9$$



$$2 + 4$$

$$=11$$



$$5 + 4$$

$$=12$$

