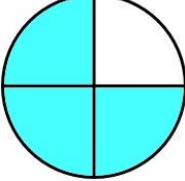
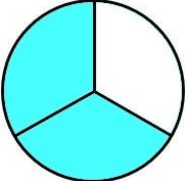
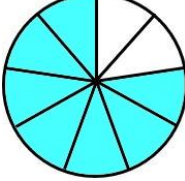
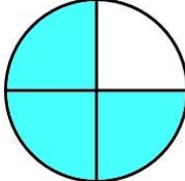
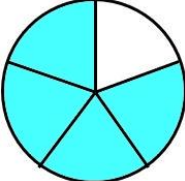
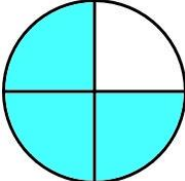
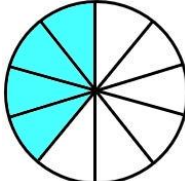
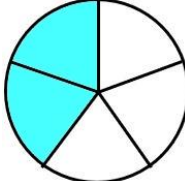
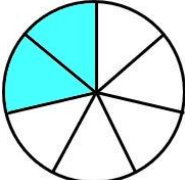
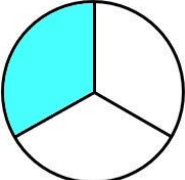
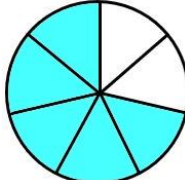
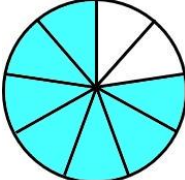
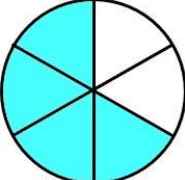
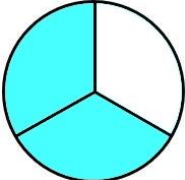
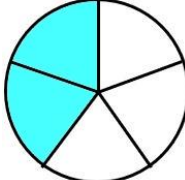
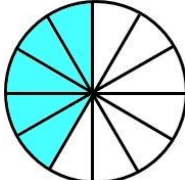
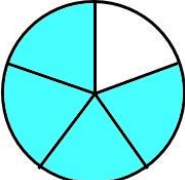
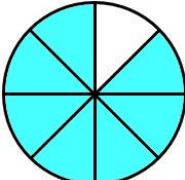
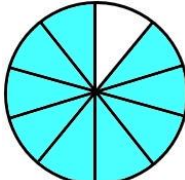
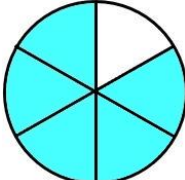


COMPARANDO FRACCIÓN CON DIAGRAMAS - HOJA 3

RESPUESTAS

<p>1)  $\frac{3}{5}$ <input type="text" value=">"/>  $\frac{2}{3}$</p>	<p>6)  $\frac{7}{9}$ <input type="text" value=">"/>  $\frac{3}{4}$</p>
<p>2)  $\frac{4}{5}$ <input type="text" value=">"/>  $\frac{3}{4}$</p>	<p>7)  $\frac{4}{10}$ <input type="text" value="="/>  $\frac{2}{5}$</p>
<p>3)  $\frac{2}{7}$ <input type="text" value="<"/>  $\frac{1}{3}$</p>	<p>8)  $\frac{5}{7}$ <input type="text" value="<"/>  $\frac{7}{9}$</p>
<p>4)  $\frac{4}{6}$ <input type="text" value="="/>  $\frac{2}{3}$</p>	<p>9)  $\frac{2}{5}$ <input type="text" value="<"/>  $\frac{5}{12}$</p>
<p>5)  $\frac{4}{5}$ <input type="text" value="<"/>  $\frac{7}{8}$</p>	<p>10)  $\frac{9}{10}$ <input type="text" value=">"/>  $\frac{5}{6}$</p>

