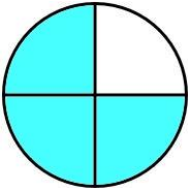
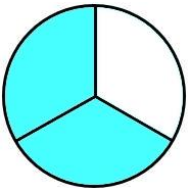
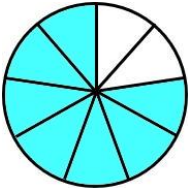
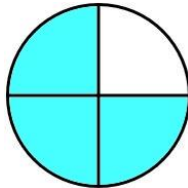
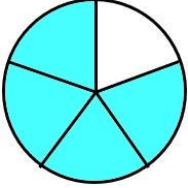
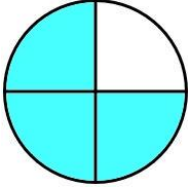
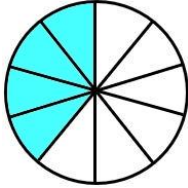
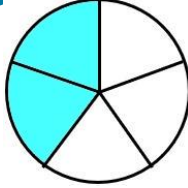
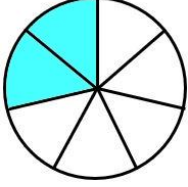
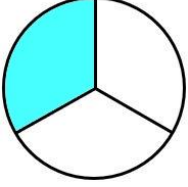
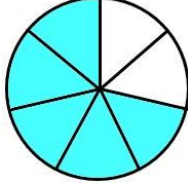
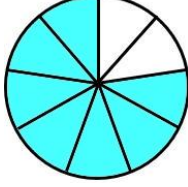
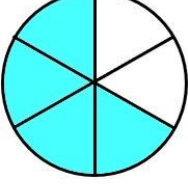
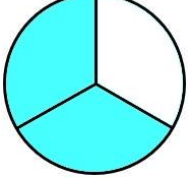
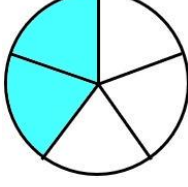
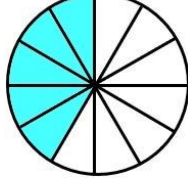
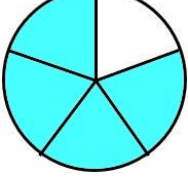
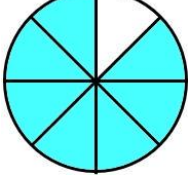
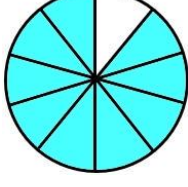
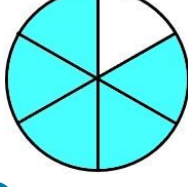


COMPARANDO FRACCIONES CON DIAGRAMAS - HOJA 3

Usa los diagramas de fracciones para completar las fracciones que faltan y usa los símbolos $>$, $<$ y $=$ para mostrar cómo se comparan las fracciones. El primero de ellos está hecho para ti.

<p>1)  <input type="text" value=">"/> </p> <p>$\frac{3}{5}$ <input type="text"/> $\frac{2}{3}$</p>	<p>6)  <input type="text"/> </p> <p>— <input type="text"/> —</p>
<p>2)  <input type="text"/> </p> <p>— <input type="text"/> —</p>	<p>7)  <input type="text"/> </p> <p>— <input type="text"/> —</p>
<p>3)  <input type="text"/> </p> <p>— <input type="text"/> —</p>	<p>8)  <input type="text"/> </p> <p>— <input type="text"/> —</p>
<p>4)  <input type="text"/> </p> <p>— <input type="text"/> —</p>	<p>9)  <input type="text"/> </p> <p>— <input type="text"/> —</p>
<p>5)  <input type="text"/> </p> <p>— <input type="text"/> —</p>	<p>10)  <input type="text"/> </p> <p>— <input type="text"/> —</p>

