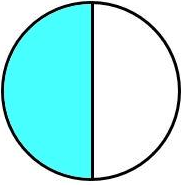
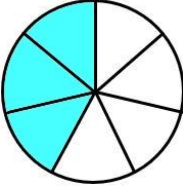
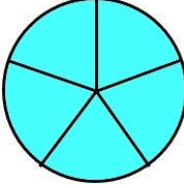
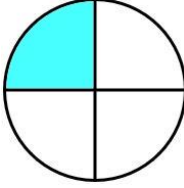
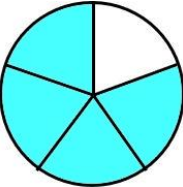
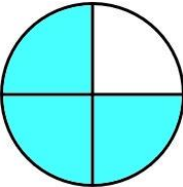
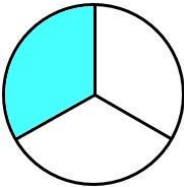
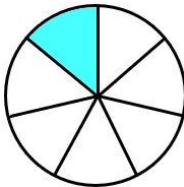
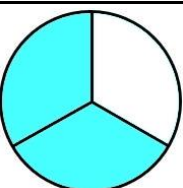
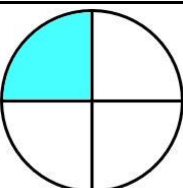
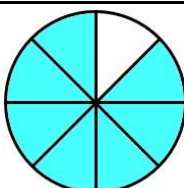
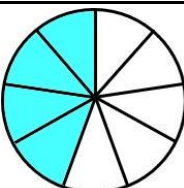
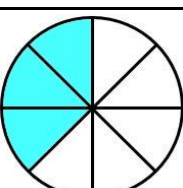
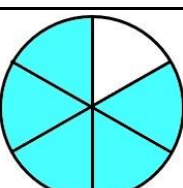
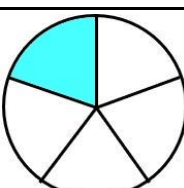
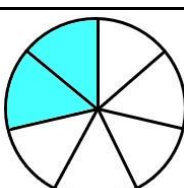


# ORDENANDO FRACCIONES CON DIAGRAMAS - HOJA 1

## RESPUESTAS

1)		$\frac{1}{2}$		$\frac{3}{7}$		$\frac{5}{5}$		$\frac{1}{4}$
el más pequeño				el más grande				
$\frac{1}{4}$		$\frac{3}{7}$		$\frac{1}{2}$		$\frac{5}{5}$		
2)		$\frac{4}{5}$		$\frac{3}{4}$		$\frac{1}{3}$		$\frac{1}{7}$
el más pequeño				el más grande				
$\frac{1}{7}$		$\frac{1}{3}$		$\frac{3}{4}$		$\frac{4}{5}$		
3)		$\frac{2}{3}$		$\frac{1}{4}$		$\frac{7}{8}$		$\frac{4}{9}$
el más pequeño				el más grande				
$\frac{1}{4}$		$\frac{4}{9}$		$\frac{2}{3}$		$\frac{7}{8}$		
4)		$\frac{3}{8}$		$\frac{5}{6}$		$\frac{1}{5}$		$\frac{2}{7}$
el más pequeño				el más grande				
$\frac{1}{5}$		$\frac{2}{7}$		$\frac{3}{8}$		$\frac{5}{6}$		

