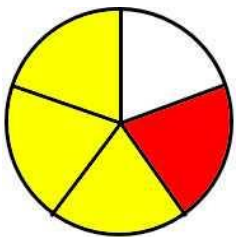
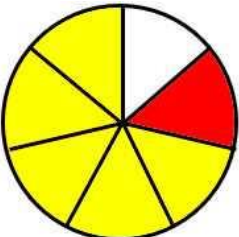
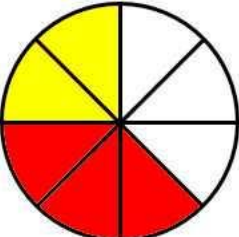
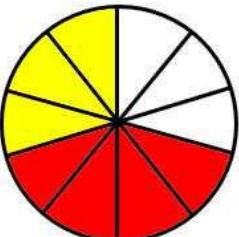


# SUMA Y RESTA DE FRACCIONES CON DENOMINADORES COMUNES USANDO LOS CÍRCULOS 1

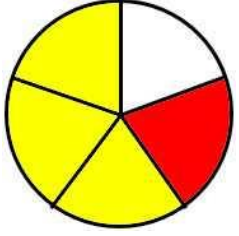
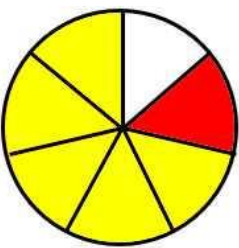
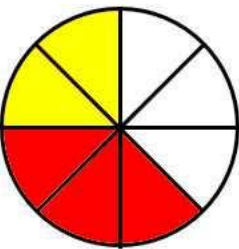
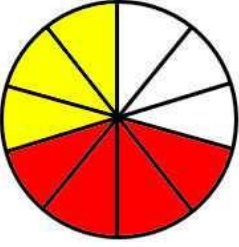
Usa los diagramas de fracciones para ayudarte a responder las preguntas de fracciones.

	FRACCIÓN	OPERACIONES DE SUMA	ORACIONES DE RESTA
1)		$\frac{3}{5} + \frac{1}{5} = \frac{\quad}{5}$	$\frac{4}{5} - \frac{1}{5} = \frac{\quad}{5}$
		$\frac{1}{5} + \frac{3}{5} = \frac{\quad}{5}$	$\frac{4}{5} - \frac{3}{5} = \frac{\quad}{5}$
2)		$\frac{5}{7} + \frac{1}{7} = \frac{\quad}{7}$	$\frac{6}{7} - \frac{1}{7} = \frac{\quad}{7}$
		$\frac{1}{7} + \frac{5}{7} = \frac{\quad}{7}$	$\frac{6}{7} - \frac{5}{7} = \frac{\quad}{7}$
3)		$\frac{2}{8} + \frac{3}{8} = \frac{\quad}{8}$	$\frac{5}{8} - \frac{2}{8} = \frac{\quad}{8}$
		$\frac{3}{8} + \frac{2}{8} = \frac{\quad}{8}$	$\frac{5}{8} - \frac{3}{8} = \frac{\quad}{8}$
4)		$\frac{3}{10} + \frac{4}{10} = \frac{\quad}{10}$	$\frac{7}{10} - \frac{3}{10} = \frac{\quad}{10}$
		$\frac{4}{10} + \frac{3}{10} = \frac{\quad}{10}$	$\frac{7}{10} - \frac{4}{10} = \frac{\quad}{10}$



## SUMA Y RESTA DE FRACCIONES CON DENOMINADORES COMUNES USANDO LOS CÍRCULOS 1 - RESPUESTAS

*Sigue las instrucciones y completa las oraciones fraccionarias. El primero de ellos está hecho para ti.*

	FRACCIÓN	OPERACIONES DE SUMA	ORACIONES DE RESTA
1)		$\frac{3}{5} + \frac{1}{5} = \frac{4}{5}$	$\frac{4}{5} - \frac{1}{5} = \frac{3}{5}$
		$\frac{1}{5} + \frac{3}{5} = \frac{4}{5}$	$\frac{4}{5} - \frac{3}{5} = \frac{1}{5}$
2)		$\frac{5}{7} + \frac{1}{7} = \frac{6}{7}$	$\frac{6}{7} - \frac{1}{7} = \frac{5}{7}$
		$\frac{1}{7} + \frac{5}{7} = \frac{6}{7}$	$\frac{6}{7} - \frac{5}{7} = \frac{1}{7}$
3)		$\frac{2}{8} + \frac{3}{8} = \frac{5}{8}$	$\frac{5}{8} - \frac{2}{8} = \frac{3}{8}$
		$\frac{3}{8} + \frac{2}{8} = \frac{5}{8}$	$\frac{5}{8} - \frac{3}{8} = \frac{2}{8}$
4)		$\frac{3}{10} + \frac{4}{10} = \frac{7}{10}$	$\frac{7}{10} - \frac{3}{10} = \frac{4}{10}$
		$\frac{4}{10} + \frac{3}{10} = \frac{7}{10}$	$\frac{7}{10} - \frac{4}{10} = \frac{3}{10}$

