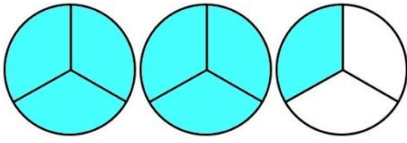


DE FRACCIÓN IMPROPIA A NÚMERO MIXTO - HOJA 1

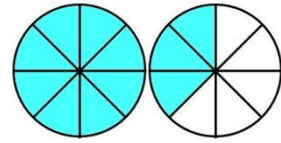
Usa los diagramas de fracciones para calcular los números mixtos. El primero de ellos está hecho para ti.

1)



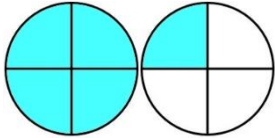
$$\frac{7}{3} = 2 \frac{1}{3}$$

7)



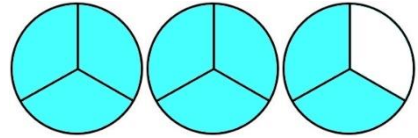
$$\frac{11}{8} =$$

2)



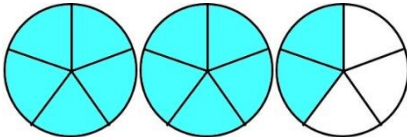
$$\frac{5}{4} =$$

8)



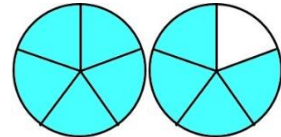
$$\frac{8}{3} =$$

3)



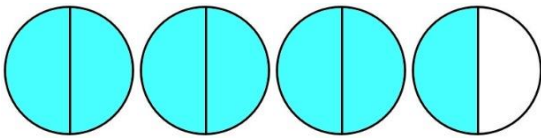
$$\frac{12}{5} =$$

9)



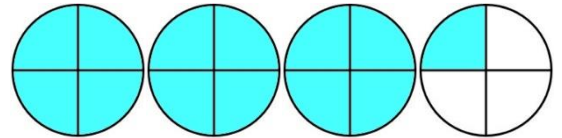
$$\frac{9}{5} =$$

4)



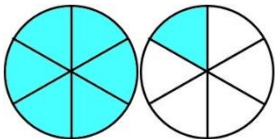
$$\frac{7}{2} =$$

10)



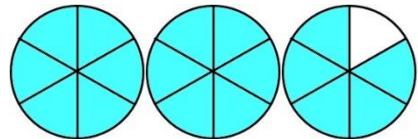
$$\frac{13}{4} =$$

5)



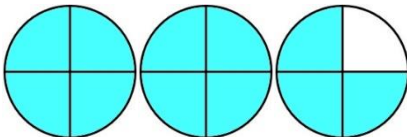
$$\frac{7}{6} =$$

11)



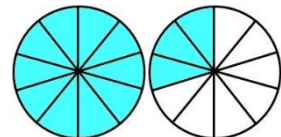
$$\frac{17}{6} =$$

6)



$$\frac{11}{4} =$$

12)



$$\frac{13}{10} =$$

