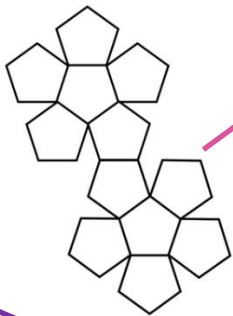
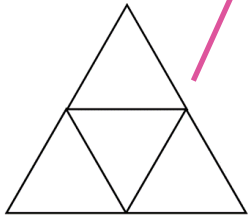

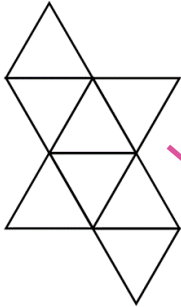
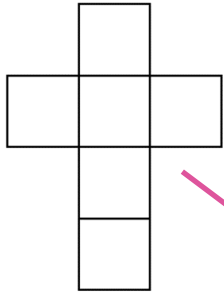




# ENCUENTRA LA COINCIDENCIA PARA LAS REDES - HOJA 2 RESPUESTAS

Une cada red con su nombre y representación 3d.



Tetraedro

Cubo

Octaedro

Dodecaedro

Icosaedro

