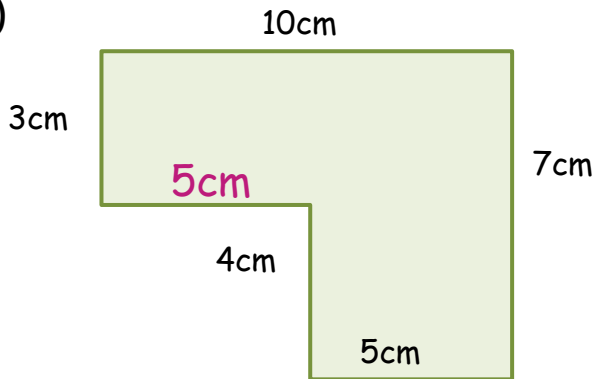


# ÁREA Y PERÍMETRO- HOJA 4 - RESPUESTAS

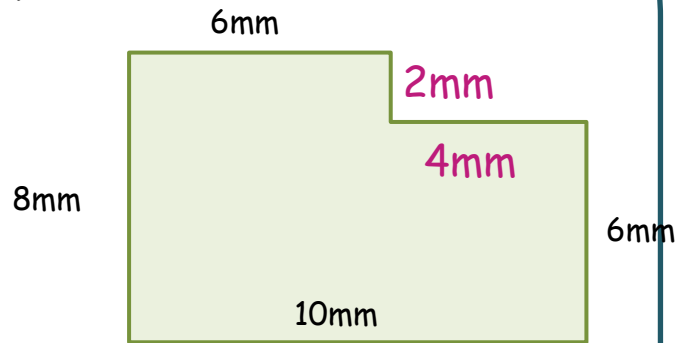
1)



Área = 50 cm cuadrados ( $\text{cm}^2$ )

Perímetro = 34 cm

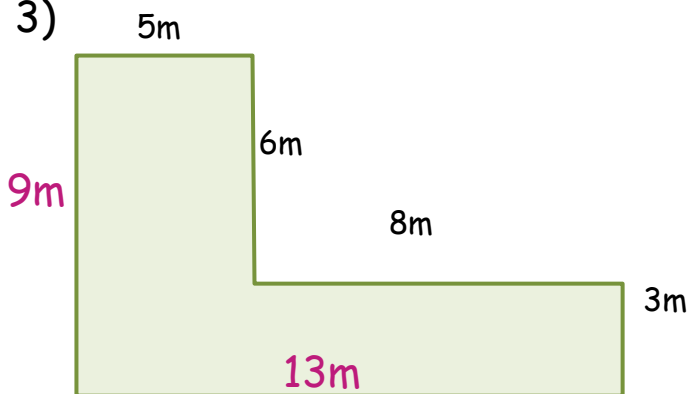
2)



Área = 72 mm cuadrados ( $\text{mm}^2$ )

Perímetro = 36 mm

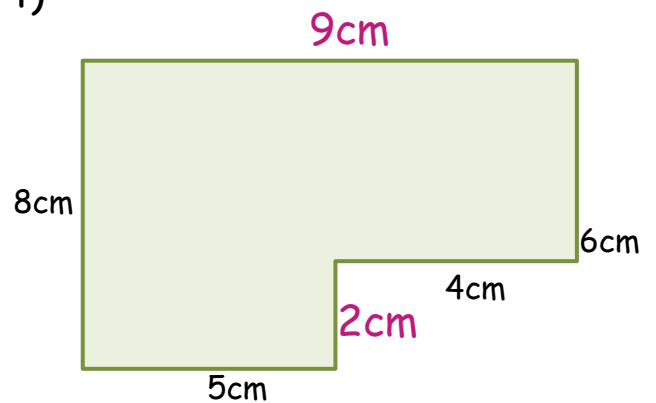
3)



Área = 69 m cuadrados ( $\text{m}^2$ )

Perímetro = 44 m

4)



Área = 64 cm cuadrados ( $\text{cm}^2$ )

Perímetro = 34 cm

