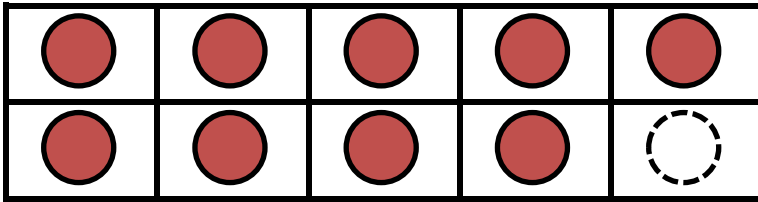
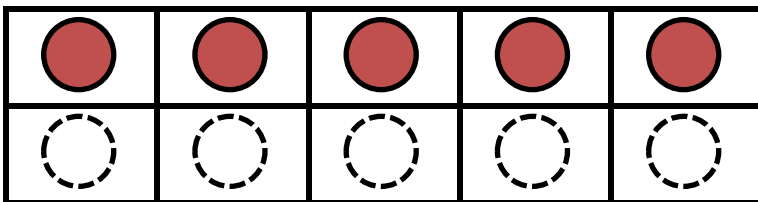


VÍNCULOS NUMÉRICOS A 10 - HOJA 4 - RESPUESTAS

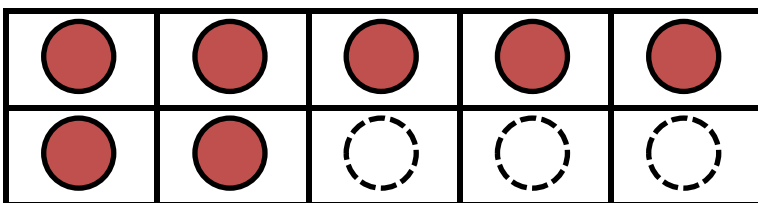
Completa el marco de las decenas, y completa los números faltantes que sean iguales a 10.



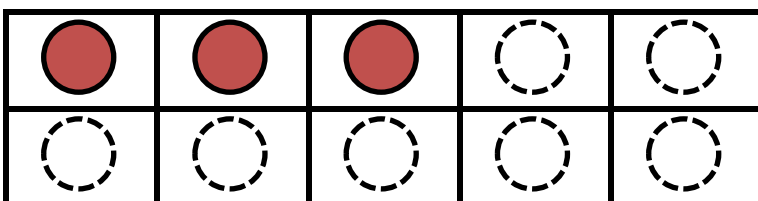
$$9 + 1 = 10$$



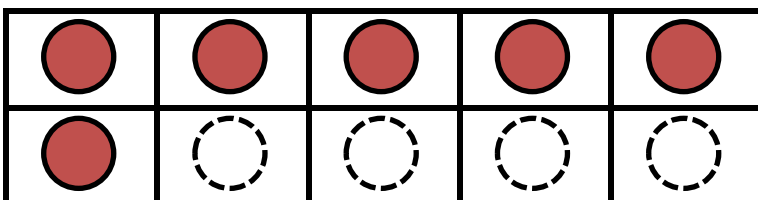
$$5 + 5 = 10$$



$$7 + 3 = 10$$



$$3 + 7 = 10$$



$$6 + 4 = 10$$

