

## VÍNCULOS NUMÉRICOS A 10 - HOJA 4

Completa el marco de las decenas, y completa los números faltantes que sean iguales a 10.

●	●	●	●	●
●	●	●	●	○

$$9 + 1 = 10$$

●	●	●	●	●

$$5 + \underline{\quad} = 10$$

●	●	●	●	●
●	●			


$$\underline{\quad} + \underline{\quad} = 10$$

●	●	●		

$$\underline{\quad} + \underline{\quad} = 10$$

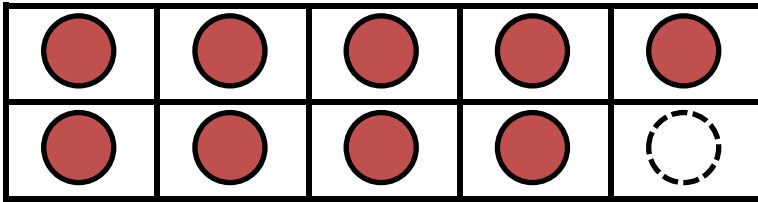
●	●	●	●	●
●				

$$\underline{\quad} + \underline{\quad} = 10$$

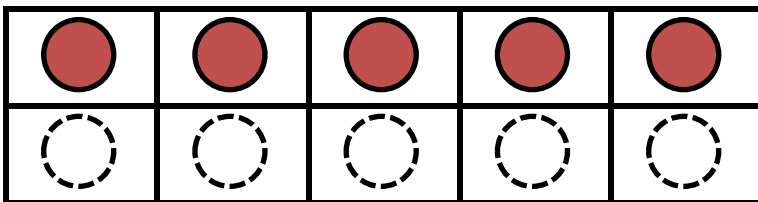


# VÍNCULOS NUMÉRICOS A 10 - HOJA 4 - RESPUESTAS

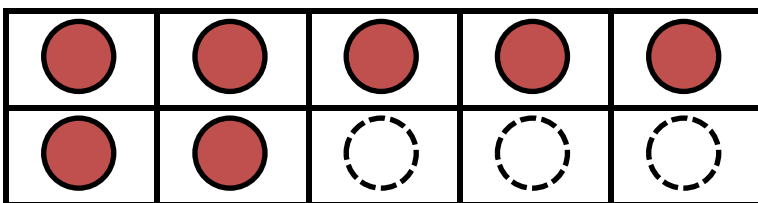
Completa el marco de las decenas, y completa los números faltantes que sean iguales a 10.



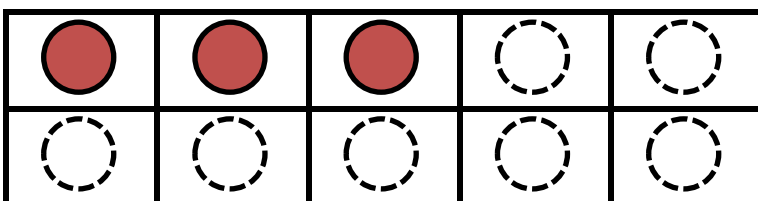
$$9 + 1 = 10$$



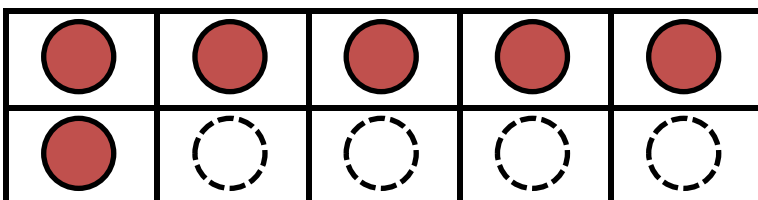
$$5 + 5 = 10$$



$$7 + 3 = 10$$



$$3 + 7 = 10$$



$$6 + 4 = 10$$

