







TABLA DEL 11 - COCHES - HOJA 2 (x y ÷) - RESPUESTAS

Escribe las respuestas a estas operaciones de multiplicación y división en las nubes de humo. Colorea las nubes de humo impares de amarillo y las nubes pares de azul.


 $11 \times 7 =$  77

 $121 \div 11 =$  11



 $44 \div 11 =$  4


 $6 \times 11 =$  66


 $77 \div 11 =$  7


 $11 \times 12 =$  132



 $8 \times 11 =$  88

 $66 \div 11 =$  6

 $110 \div 11 =$  10

 $11 \times 9 =$  99

 $55 \div 11 =$  5

 $11 \times 11 =$  121

