







TABLA DEL 11 - COCHES - HOJA 2 (x y ÷)

Escribe las respuestas a estas operaciones de multiplicación y división en las nubes de humo. Colorea las nubes de humo impares de amarillo y las nubes pares de azul.



 $11 \times 7 =$ 

 $121 \div 11 =$ 

 $44 \div 11 =$ 



 $6 \times 11 =$ 

 $77 \div 11 =$ 

 $11 \times 12 =$ 

 $8 \times 11 =$ 

 $66 \div 11 =$ 

 $110 \div 11 =$ 

 $11 \times 9 =$ 

 $55 \div 11 =$ 

 $11 \times 11 =$ 

