



# TABLA DEL 3 - COCHES - HOJA 1

Escribe las respuestas a estas operaciones de multiplicar en las nubes de humo.



Colorea las nubes de humo impares de amarillo y las nubes pares de azul.




$3 \times 2$





$3 \times 5$




$3 \times 6$




$3 \times 4$




$3 \times 1$





$3 \times 7$




$3 \times 3$



$3 \times 8$



$3 \times 9$



$3 \times 10$

