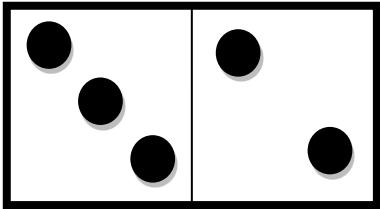
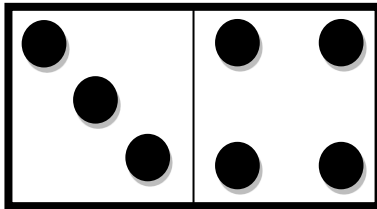


## HOJA DE SUMAS DE DOMINO 3


Cuenta el número de puntos en cada dominó y completa el total.



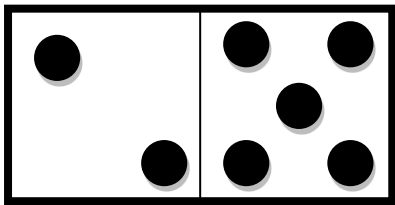
$$\underline{\quad} + \underline{\quad} = \underline{\quad}$$



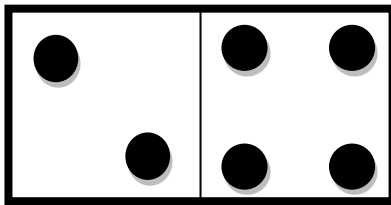
$$\underline{\quad} + \underline{\quad} = \underline{\quad}$$




$$\underline{\quad} + \underline{\quad} = \underline{\quad}$$



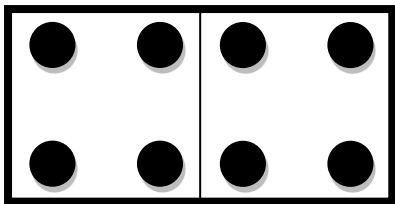
$$\underline{\quad} + \underline{\quad} = \underline{\quad}$$



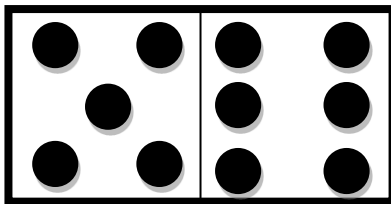
$$\underline{\quad} + \underline{\quad} = \underline{\quad}$$



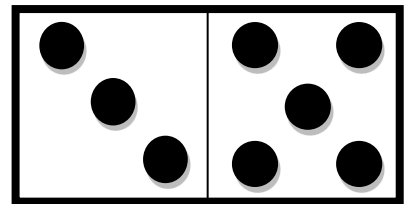
$$\underline{\quad} + \underline{\quad} = \underline{\quad}$$



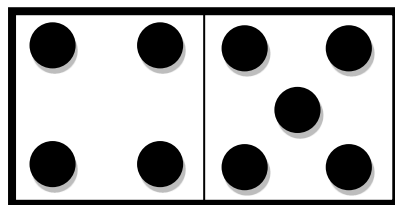
$$\underline{\quad} + \underline{\quad} = \underline{\quad}$$



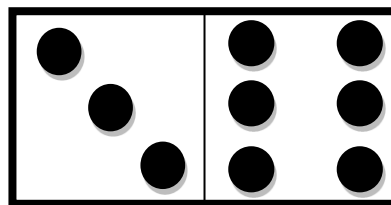
$$\underline{\quad} + \underline{\quad} = \underline{\quad}$$




$$\underline{\quad} + \underline{\quad} = \underline{\quad}$$



$$\underline{\quad} + \underline{\quad} = \underline{\quad}$$



$$\underline{\quad} + \underline{\quad} = \underline{\quad}$$

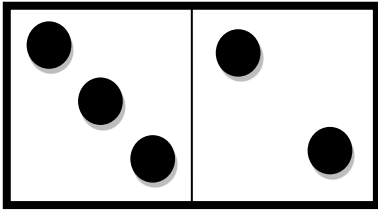


$$\underline{\quad} + \underline{\quad} = \underline{\quad}$$

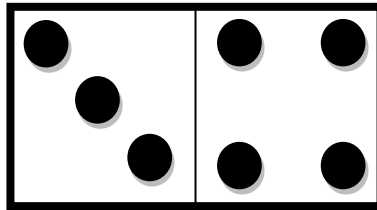


# HOJA DE SUMAS DE DOMINO 3 - RESPUESTAS


Cuenta el número de puntos en cada dominó y completa el total.



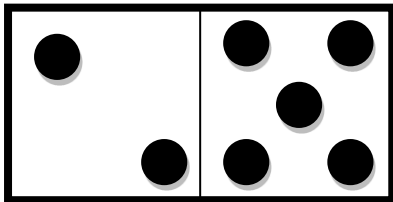
$$\underline{3} + \underline{2} = \underline{5}$$



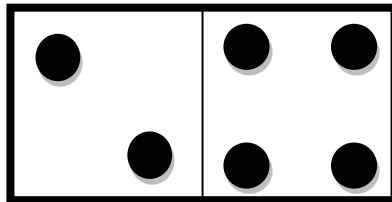
$$\underline{3} + \underline{4} = \underline{7}$$




$$\underline{6} + \underline{4} = \underline{10}$$



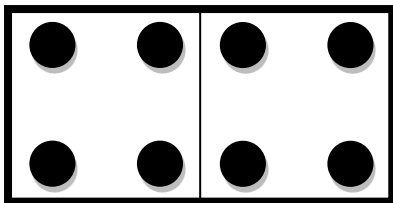
$$\underline{2} + \underline{5} = \underline{7}$$



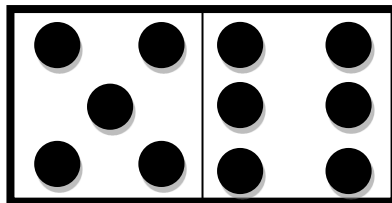
$$\underline{2} + \underline{4} = \underline{6}$$



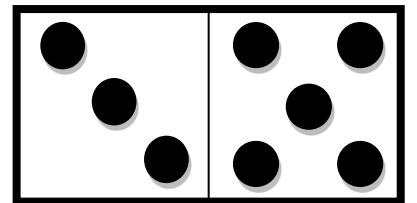
$$\underline{5} + \underline{4} = \underline{9}$$



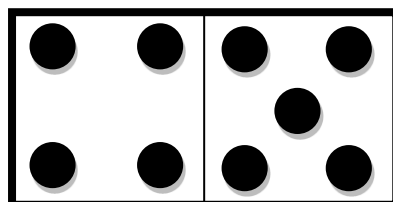
$$\underline{4} + \underline{4} = \underline{8}$$



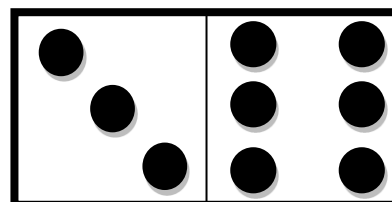
$$\underline{5} + \underline{6} = \underline{11}$$



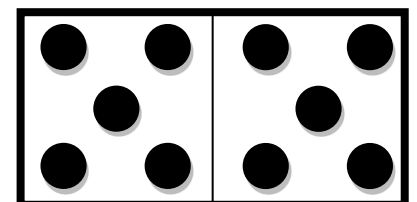
$$\underline{3} + \underline{5} = \underline{8}$$



$$\underline{4} + \underline{5} = \underline{9}$$



$$\underline{3} + \underline{6} = \underline{9}$$



$$\underline{5} + \underline{5} = \underline{10}$$

