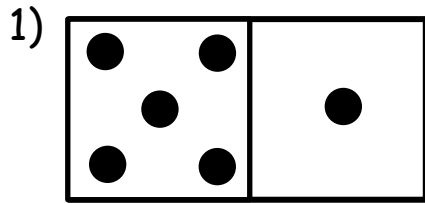
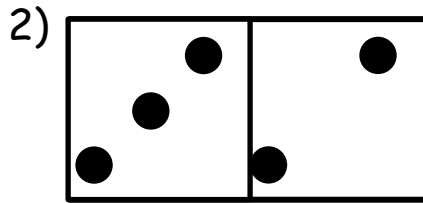


# HOJA DE SUMAS DE DOMINO 4 - RESPUESTAS

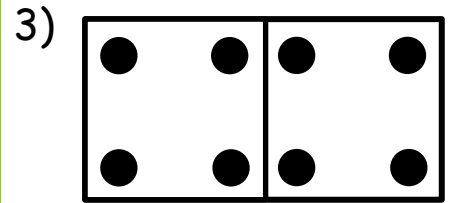
Cuenta el número de puntos en cada dominó y completa el total.



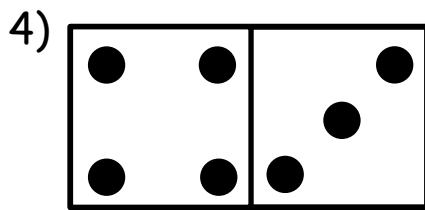
$$\underline{5} + \underline{1} = \underline{6}$$



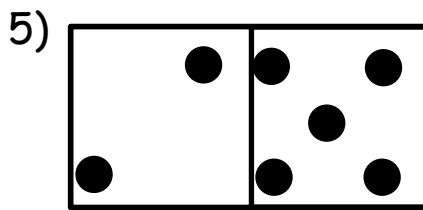
$$\underline{3} + \underline{2} = \underline{5}$$



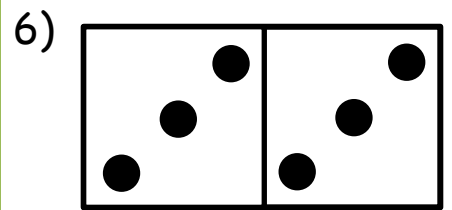
$$\underline{4} + \underline{4} = \underline{8}$$



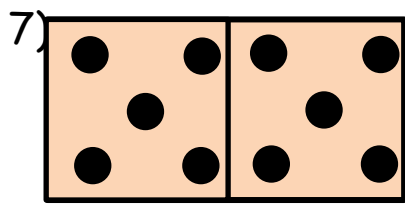
$$\underline{4} + \underline{3} = \underline{7}$$



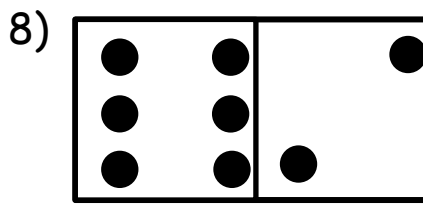
$$\underline{2} + \underline{5} = \underline{7}$$




$$\underline{3} + \underline{3} = \underline{6}$$



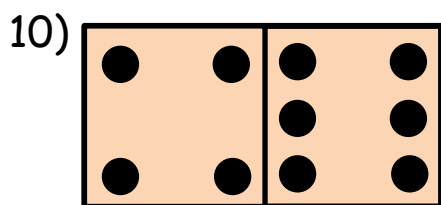
$$\underline{5} + \underline{5} = \underline{10}$$




$$\underline{6} + \underline{2} = \underline{8}$$



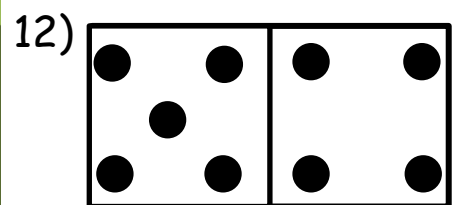
$$\underline{3} + \underline{6} = \underline{9}$$



$$\underline{4} + \underline{6} = \underline{10}$$



$$\underline{6} + \underline{5} = \underline{11}$$



$$\underline{5} + \underline{4} = \underline{9}$$



Sombrea las fichas de dominó que tienen un total de 10.

