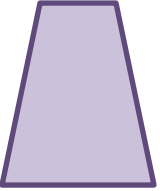




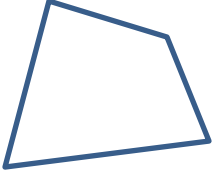


DIAGRAMAS DE VENN - HOJA 4: 2 - RESPUESTAS

Coloca las siguientes formas en el lugar correcto en ambos diagramas de Venn.

| | | | | | |
|---|---|---|--|---|---|
|  |  |  |  |  |  |
| A | B | C | D | E | F |

