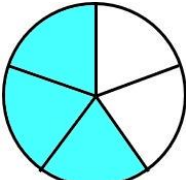
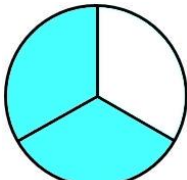



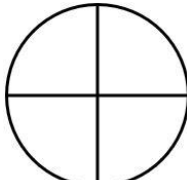




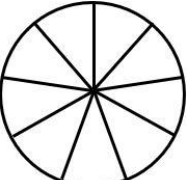

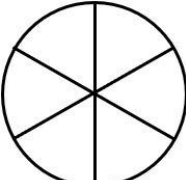


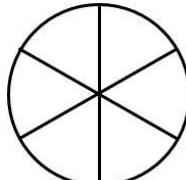
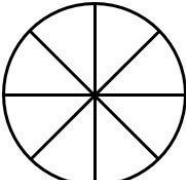
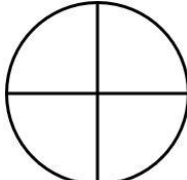
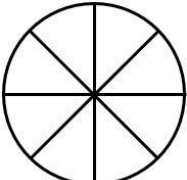



COMPARANDO FRACCIONES CON DIAGRAMAS - HOJA 2

Sombrea los diagramas de fracciones y utiliza los símbolos $>$, $<$ y $=$ para mostrar cómo se comparan las fracciones. El primero de ellos está hecho para ti.

1)  $\frac{3}{5}$	$<$	 $\frac{2}{3}$	6)  $\frac{2}{7}$	 $\frac{1}{4}$
2)  $\frac{2}{3}$	 $\frac{3}{4}$	7)  $\frac{3}{3}$	 $\frac{4}{5}$	
3)  $\frac{4}{5}$	 $\frac{2}{3}$	8)  $\frac{3}{9}$	 $\frac{1}{3}$	
4)  $\frac{1}{6}$	 $\frac{1}{5}$	9)  $\frac{3}{4}$	 $\frac{5}{6}$	
5)  $\frac{2}{8}$	 $\frac{1}{4}$	10)  $\frac{5}{8}$	 $\frac{2}{3}$	

