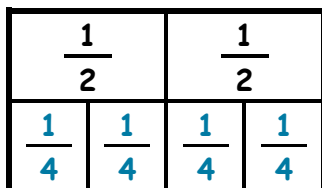


FRACCIONES EQUIVALENTES - HOJA 2 - RESPUESTAS

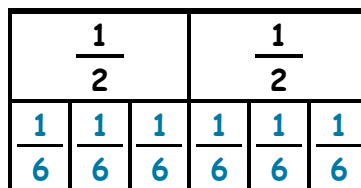
TIRAS DE FRACCIÓN

1)



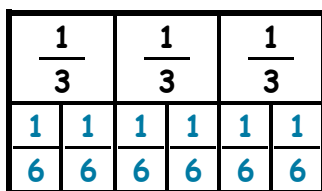
$$\frac{1}{2} = \frac{2}{4}$$

2)



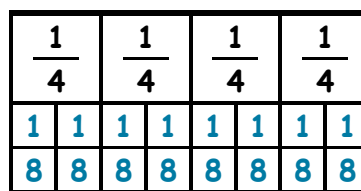
$$\frac{1}{2} = \frac{3}{6}$$

3)



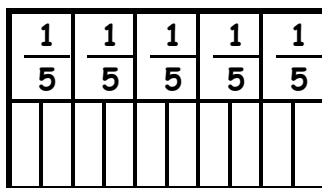
$$\frac{1}{3} = \frac{2}{6}$$

4)



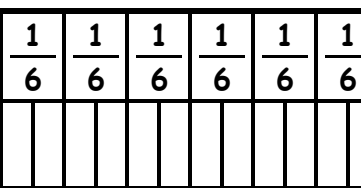
$$\frac{1}{4} = \frac{2}{8}$$

5)



$$\frac{1}{5} = \frac{2}{10}$$

6)



$$\frac{1}{6} = \frac{2}{12}$$

Ahora utiliza las tiras de fracciones para responder estas preguntas.

7) $\frac{2}{2} = \frac{4}{4}$

8) $\frac{3}{4} = \frac{6}{8}$

9) $\frac{2}{3} = \frac{4}{6}$

10) $\frac{2}{5} = \frac{4}{10}$

11) $\frac{3}{3} = \frac{6}{6}$

12) $\frac{4}{6} = \frac{8}{12}$

13) $\frac{4}{5} = \frac{8}{10}$

14) $\frac{5}{6} = \frac{10}{12}$

