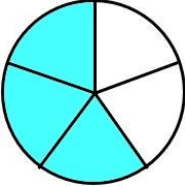
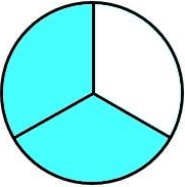
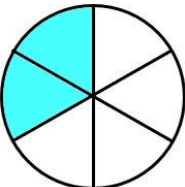
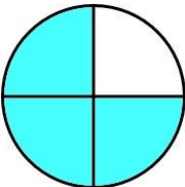
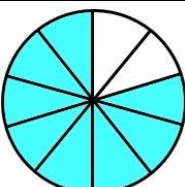
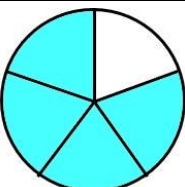
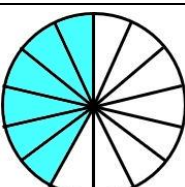
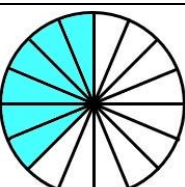
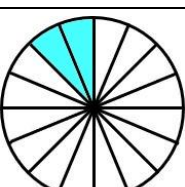
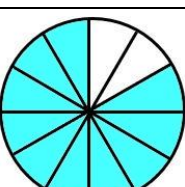


# FRACCIONES EQUIVALENTES CON CÍRCULOS - HOJA 4

Sombrea la fracción correcta del círculo y completa las fracciones equivalentes.

El primero está hecho para ti.

<p>1) </p> <p><math>\frac{3}{5} = \frac{6}{10}</math></p>	<p>6) </p> <p>_____ = _____</p>
<p>2) </p> <p>_____ = _____</p>	<p>7) </p> <p>_____ = _____</p>
<p>3) </p> <p>_____ = _____</p>	<p>8) </p> <p>_____ = _____</p>
<p>4) </p> <p>_____ = _____</p>	<p>9) </p> <p>_____ = _____</p>
<p>5) </p> <p>_____ = _____</p>	<p>10) </p> <p>_____ = _____</p>

