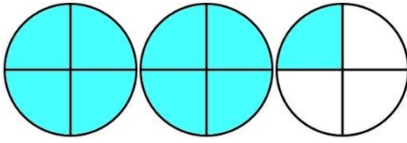


DE FRACCIÓN IMPROPIA A NÚMERO MIXTO - HOJA 2

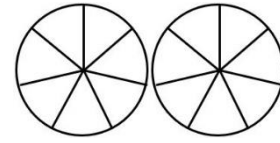
Sombrea los diagramas de fracciones para calcular los números mixtos. El primero de ellos está hecho para ti.

1)




$$\frac{9}{4} = 2 \frac{1}{4}$$

7)



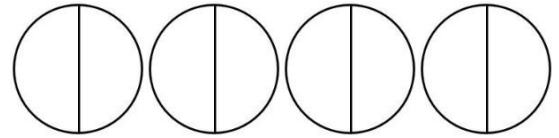
$$\frac{12}{7} =$$

2)



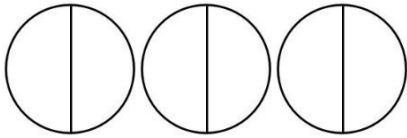
$$\frac{10}{3} =$$

8)



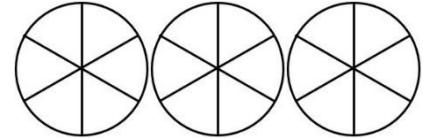
$$\frac{8}{2} =$$

3)



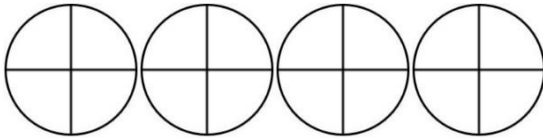
$$\frac{5}{2} =$$

9)



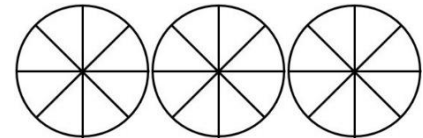
$$\frac{13}{6} =$$

4)



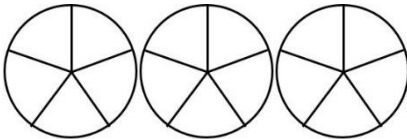
$$\frac{15}{4} =$$

10)



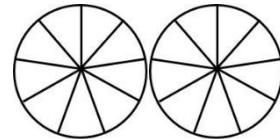
$$\frac{19}{8} =$$

5)



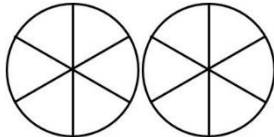
$$\frac{12}{5} =$$

11)




$$\frac{13}{9} =$$

6)




$$\frac{11}{6} =$$

12)

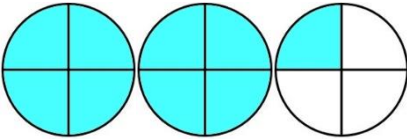


$$\frac{23}{10} =$$

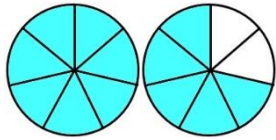


DE FRACCIÓN IMPROPIA A NÚMERO MIXTO - HOJA 2

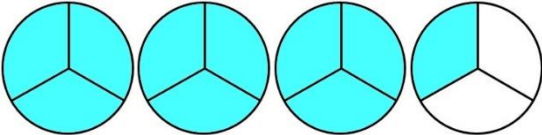
RESPUESTAS

1) 

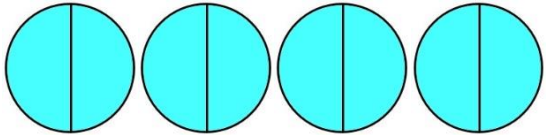
$$\frac{9}{4} = 2 \frac{1}{4}$$

7) 

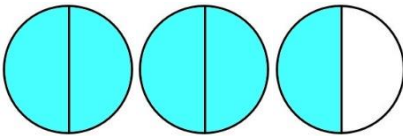
$$\frac{12}{7} = 1 \frac{5}{7}$$

2) 

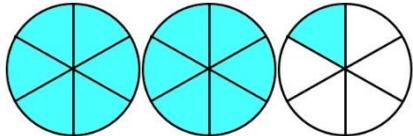
$$\frac{10}{3} = 3 \frac{1}{3}$$

8) 

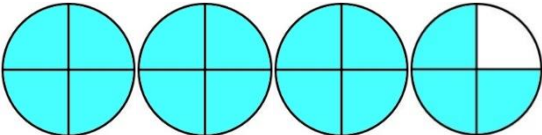
$$\frac{8}{2} = 4$$

3) 

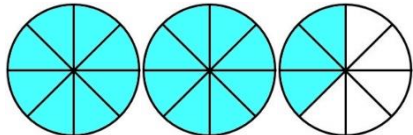
$$\frac{5}{2} = 2 \frac{1}{2}$$

9) 

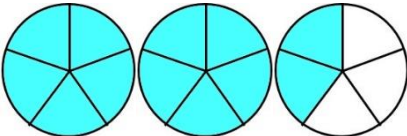
$$\frac{13}{6} = 2 \frac{1}{6}$$

4) 

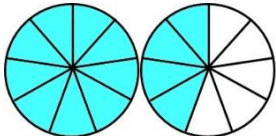
$$\frac{15}{4} = 3 \frac{3}{4}$$

10) 

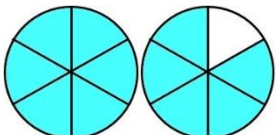
$$\frac{19}{8} = 2 \frac{3}{8}$$

5) 

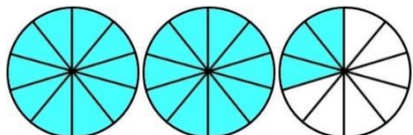
$$\frac{12}{5} = 2 \frac{2}{5}$$

11) 

$$\frac{13}{9} = 1 \frac{4}{9}$$

6) 

$$\frac{11}{6} = 1 \frac{5}{6}$$

12) 

$$\frac{23}{10} = 2 \frac{3}{10}$$

